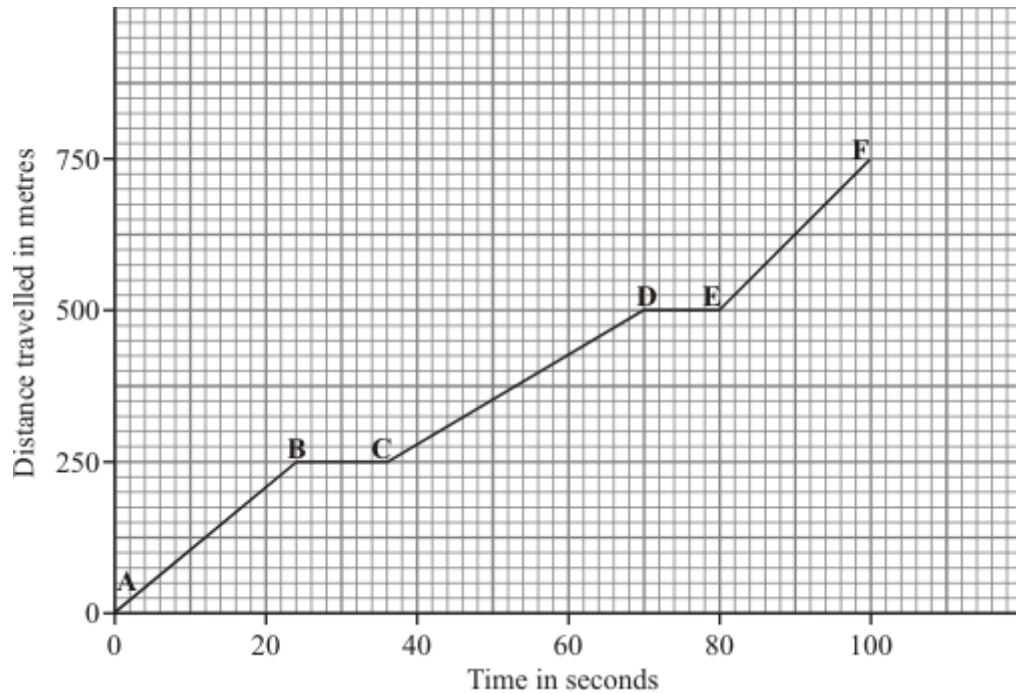


Q1. This question is about a car travelling through a town.

(a) The graph shows how far the car travelled and how long it took.



(i) Between which points was the car travelling fastest? Tick (✓) your answer.

Points	Tick (✓)
A – B	
B – C	
C – D	
D – E	
E – F	

(1)

(ii) Between which points was the car stationary?

.....

.....

(1)

(b) Complete the sentences by writing the correct words in the spaces.

When a car has to stop, the **overall** stopping distance is greater if:

- the car is poorly maintained;
- there are adverse weather conditions;
- the car is travelling ;
- the driver's reactions are

Also, the greater the speed of the car, then the greater the braking


needed to stop in a certain time.

(3)

(Total 5 marks)

- Q2.** (a) A car driver makes an emergency stop.

The chart shows the 'thinking distance' and the 'braking distance' needed to stop the car.



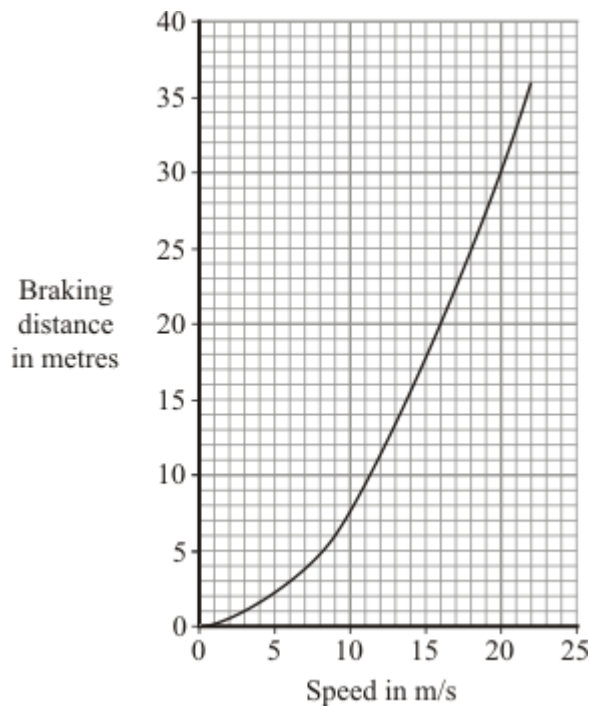
Calculate the total stopping distance of the car.

.....

Stopping distance = m

(1)

- (b) The graph shows how the braking distance of a car driven on a dry road changes with the car's speed.



The braking distance of the car on an icy road is longer than the braking distance of the car on a dry road.

- (i) Draw a new line on the graph to show how the braking distance of the car on an icy road changes with speed.

(2)

- (ii) Which **two** of the following would also increase the braking distance of the car?

Put a tick (✓) next to each of your answers.

rain on the road

the driver having drunk alcohol

car brakes in bad condition

the driver having taken drugs

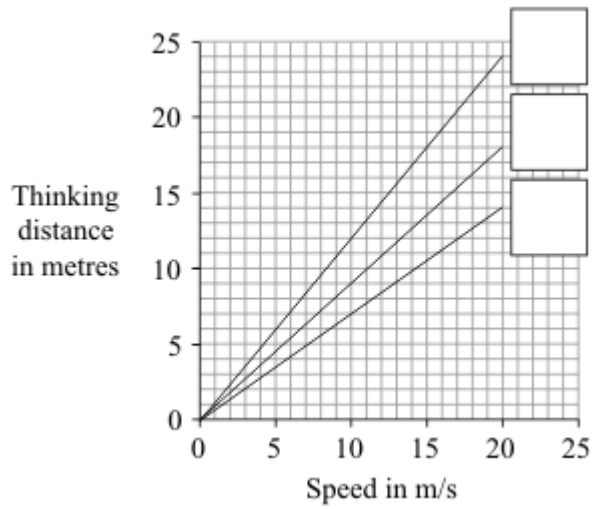
(2)

- (c) The thinking distance depends on the driver's reaction time.

The table shows the reaction times of three people driving under different conditions.

Car driver	Condition	Reaction time in seconds
A	Wide awake with no distractions	0.7
B	Using a hands-free mobile phone	0.9
C	Very tired and listening to music	1.2

The graph lines show how the thinking distance for the three drivers, **A**, **B** and **C**, depends on how fast they are driving the car.



- (i) Match each graph line to the correct driver by writing **A**, **B** or **C** in the box next to the correct line.

(2)

- (ii) The information in the table cannot be used to tell if driver **C**'s reaction time is increased by being tired or by listening to music.

Explain why.

.....

.....

.....

.....

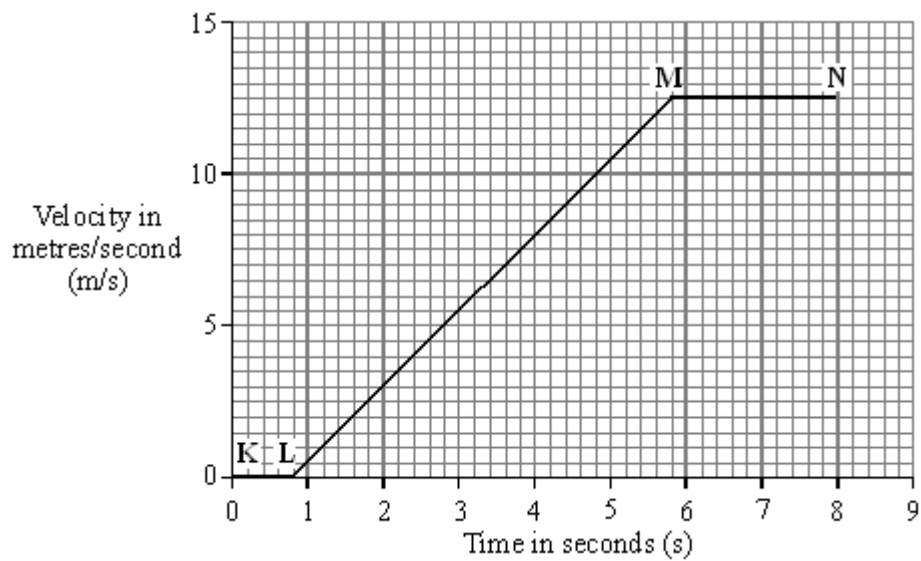
(2)

(Total 9 marks)

Q3. A car and a bicycle are travelling along a straight road. They have stopped at road works.



The graph shows how the velocity of the car changes after the sign is changed to GO.



(a) Between which two points on the graph is the car moving at constant velocity?

.....

(1)

(b) Between which two points on the graph is the car accelerating?

.....

(1)

(c) Between the sign changing to GO and the car starting to move, there is a time delay. This is called the reaction time.

(i) What is the reaction time of the car driver?

Reaction time = seconds

(1)

(ii) Which **one** of the following could increase the reaction time of a car driver? Tick the box next to your choice.

Drinking alcohol

Wet roads

Worn car brakes

(1)

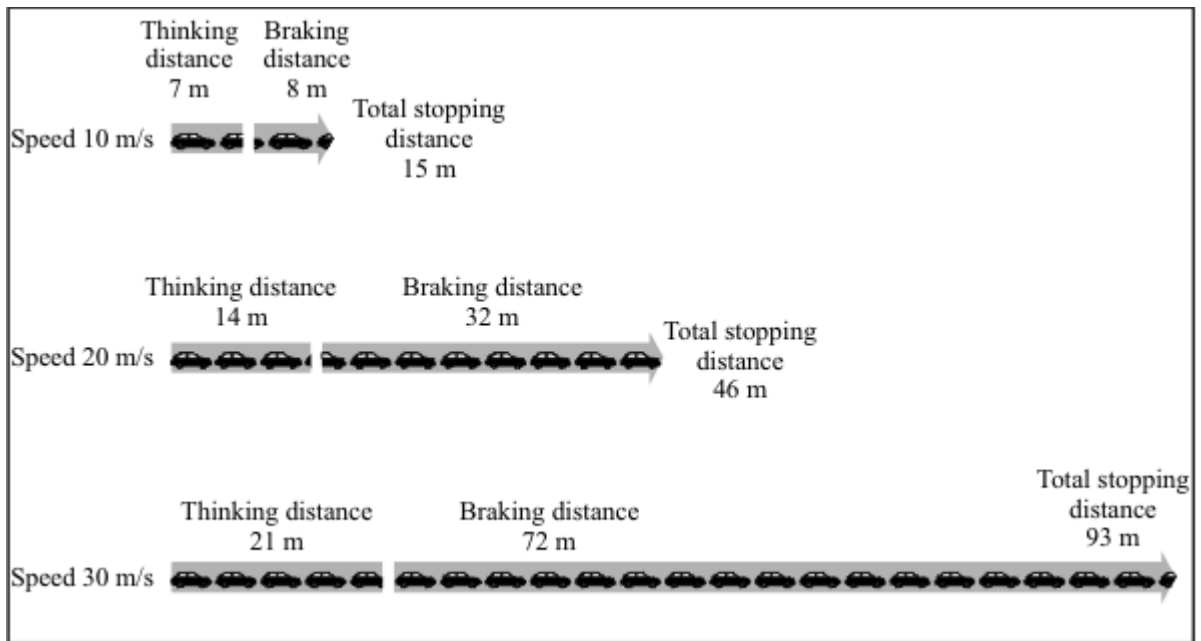
(d) The cyclist starts to move at the same time as the car. For the first 2 seconds the cyclist's acceleration is constant and is greater than that of the car.

Draw a line on the graph to show how the velocity of the cyclist might change during the first 2 seconds of its motion.

(2)

(Total 6 marks)

Q4. The diagram below shows the thinking distances, braking distances and total stopping distances at different speeds.



(a) Look at the total stopping distances at each speed.

Complete the sentence by choosing the correct words from the box.

distance	force	mass	time
-----------------	--------------	-------------	-------------

The total stopping distance depends on the distance the car travels during the driver's reaction and under the braking

(2)

(b) Give **three** other factors that could cause the total stopping distance of a car to be greater. Do **not** give the factors in **Figure 1**.

- 1
-
- 2
-

3

.....

(3)
(Total 5 marks)

Q5.(a) A car driver makes an emergency stop.

The chart shows the 'thinking distance' and the 'braking distance' needed to stop the car.



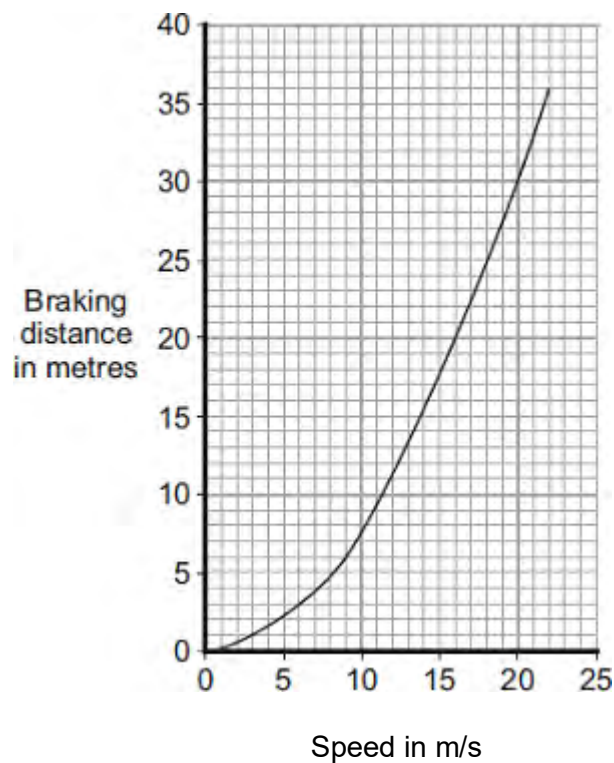
Calculate the total stopping distance of the car.

.....

Stopping distance = m

(1)

(b) The graph shows how the braking distance of a car driven on a dry road changes with the car's speed.



The braking distance of the car on an icy road is longer than the braking distance of the car on a dry road.

(i) Draw a new line on the graph to show how the braking distance of the car on an icy road changes with speed.

(2)

- (ii) Which **one** of the following would also increase the braking distance of the car?

Put a tick (✓) in the box next to your answer.

Rain on the road

The driver having drunk alcohol

The driver having taken drugs

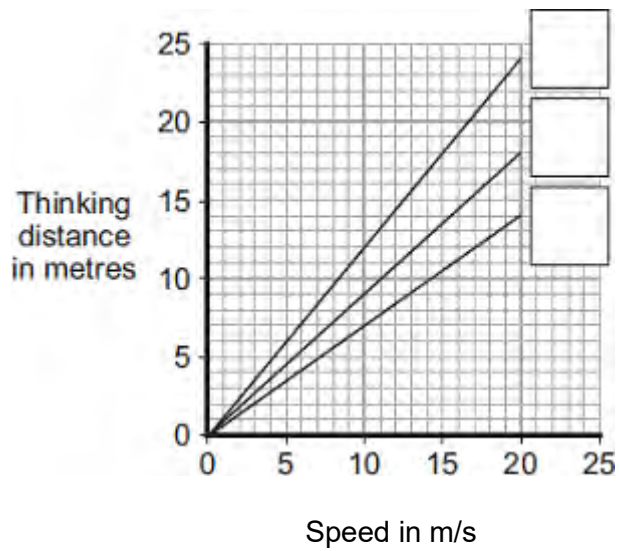
(1)

- (c) The thinking distance depends on the driver's reaction time.

The table shows the reaction times of three people driving under different conditions.

Car driver	Condition	Reaction time in second
A	Wide awake with no distractions	0.7
B	Using a hands-free mobile phone	0.9
C	Very tired and listening to music	1.2

The graph lines show how the thinking distance for the three drivers, **A**, **B**, and **C**, depends on how fast they are driving the car.



- (i) Match each graph line to the correct driver by writing **A**, **B**, or **C** in the box next to the correct line.

(2)

- (ii) The information in the table cannot be used to tell if driver **C**'s reaction time is increased by being tired **or** by listening to music. Explain why.

.....

.....

.....

.....

(2)

(Total 8 marks)

Q6. The diagram shows the horizontal forces acting on a car travelling along a straight road.



(a) Complete the following sentences by drawing a ring around the correct word in each box.

(i) When the driving force equals the drag force, the speed of the car is

decreasing
constant
increasing

(1)

(ii) Putting the brakes on transforms the car's kinetic energy mainly into

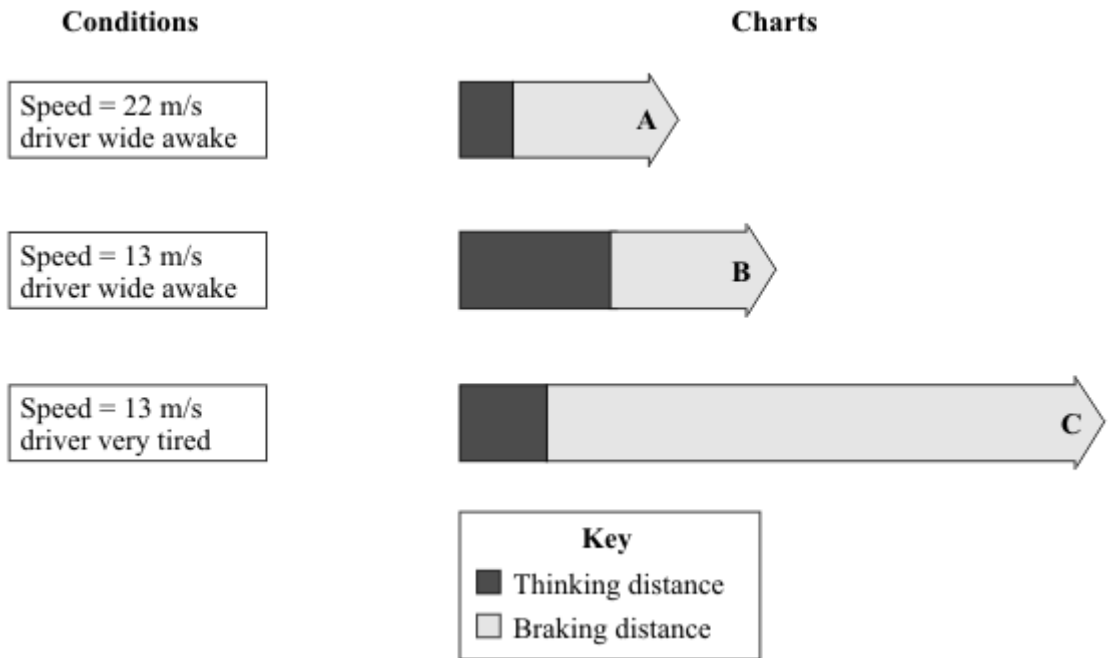
heat
light
sound

(1)

(b) The charts, **A**, **B** and **C** give the thinking distance and the braking distance for a car driven under different conditions.

(i) Draw straight lines to match each chart to the correct conditions.

Draw only **three** lines.



(2)

(ii) The three charts above all apply to dry road conditions.

How would the braking distances be different if the road were wet?

.....

.....

(1)
(Total 5 marks)

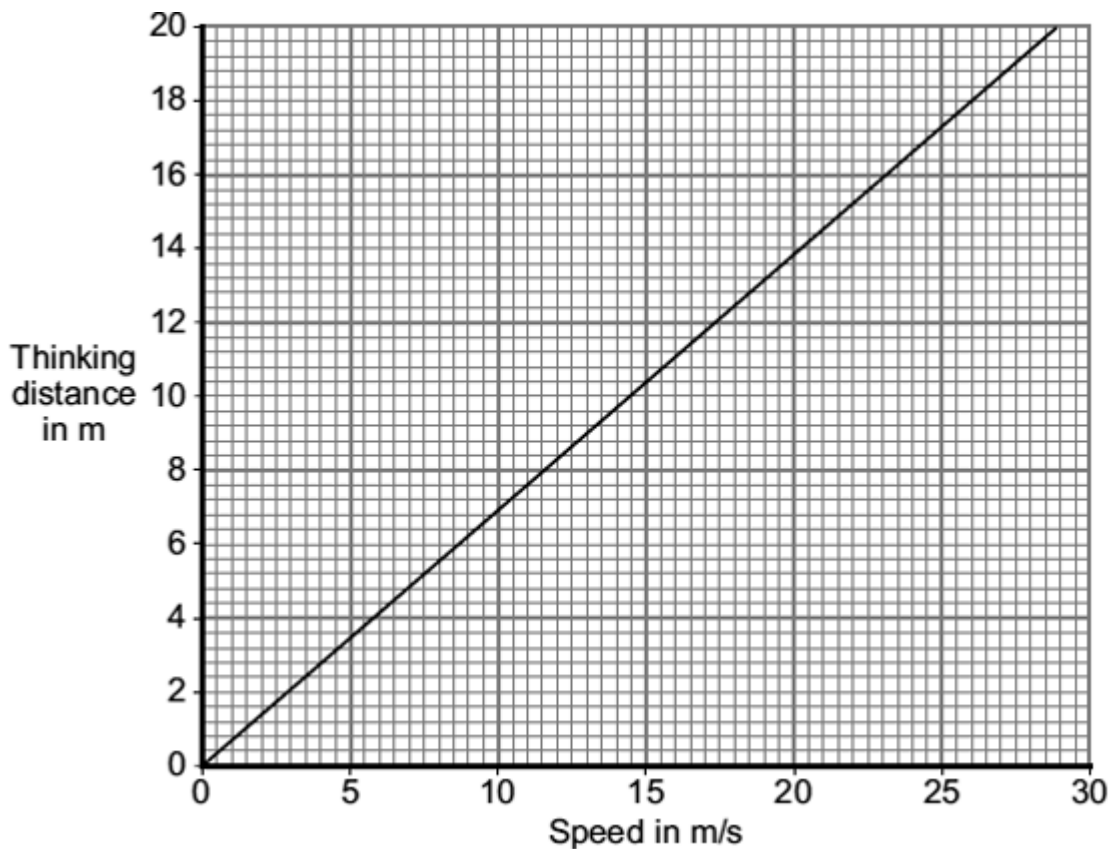
- Q7.** (a) The total stopping distance of a car has two parts. One part is the distance the car travels during the driver's reaction time. This distance is often called the 'thinking distance'.

What distance is added to the 'thinking distance' to give the total stopping distance?

.....
.....

(1)

- (b) The graph shows the relationship between the speed of a car and the thinking distance.



Describe the relationship between speed and thinking distance.

.....
.....

(2)

- (c) The diagram shows two students investigating reaction time.



One student holds a 30 cm ruler, then lets go. As soon as the second student sees the ruler fall, she closes her hand, stopping the ruler. The further the ruler falls before being stopped, the slower her reaction time.

- (i) One student always holds the ruler the same distance above the other student's hand.
In this experiment, what type of variable is this?

Put a tick (✓) in the box next to your answer.

dependent variable_

control variable_

(1)

- (ii) Describe how this experiment could be used to find out whether listening to music affects reaction time.

.....
.....
.....
.....

(2)

(d) The following information is written on the label of some cough medicine.

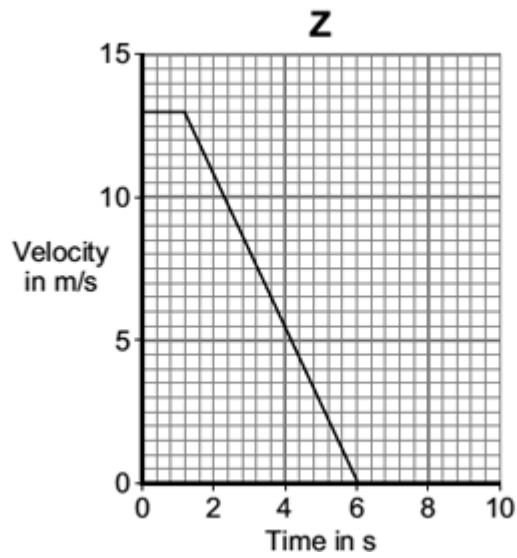
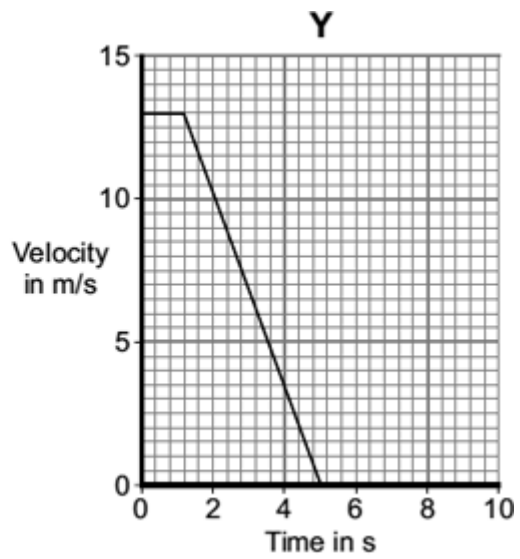
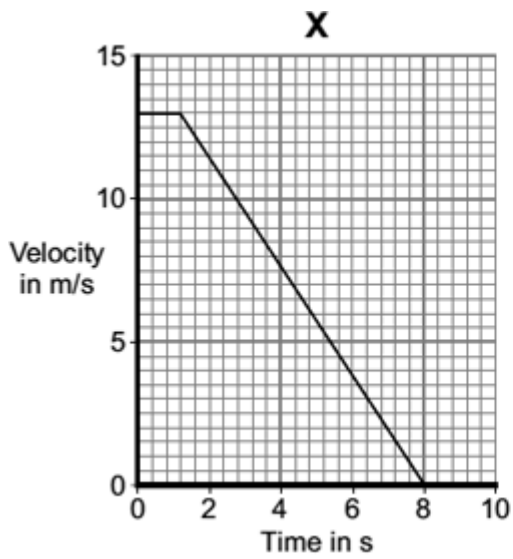
<p>WARNING: Causes drowsiness. Do not drive or operate machinery.</p>
--

How is feeling drowsy (sleepy) likely to affect a driver's reaction time?

.....
.....

(1)

(e) Three cars, **X**, **Y** and **Z**, are being driven along a straight road towards a set of traffic lights.
The graphs show how the velocity of each car changes once the driver sees that the traffic light has turned to red.



Which one of the cars, **X**, **Y** or **Z**, stops in the shortest distance?

.....

(1)
(Total 8 marks)

Q8. Motorway accidents have many causes.

(a) Which **one** of the following is most likely to increase the chance of a car being in an accident?

Tick (✓) the box next to your answer.

The car has just had new tyres fitted.

The driver has been drinking alcohol.

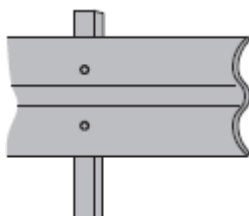
A road surface in dry conditions

Give a reason for your answer.

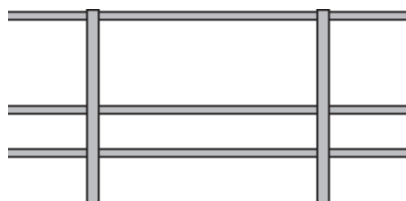
.....
.....

(2)

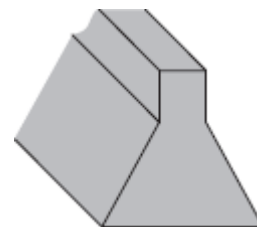
(b) The diagram shows three designs of motorway crash barriers.



Steel sheets



Steel 'ropes'



Solid concrete

Before a new design of barrier is used, it must be tested.

A car of mass 1500 kg is driven at 30 m/s to hit the barrier at an angle of 20 degrees.

This barrier must slow the car down and must not break.

Explain why the mass of the car, the speed of the car and the angle at which the car hits the barrier must be the same in every test.

.....

.....
.....
.....
.....

(2)

- (c) A group of scientists has suggested that new designs of crash barriers should be first tested using computer simulations.

Which **two** statements give sensible reasons for testing new barrier designs using a computer simulation?

Put a tick (✓) in the box next to each of your answers.

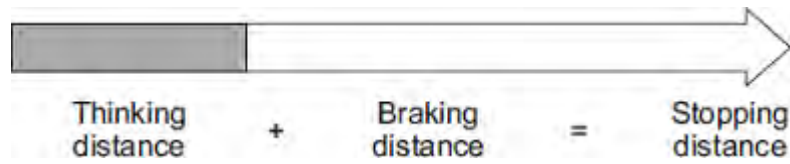
The design of the barrier can be changed easily.

Data for different conditions can be obtained quickly.

Simulations are more realistic than using cars and barriers.

(1)
(Total 5 marks)

Q9. The diagram shows how the thinking distance and braking distance of a car add together to give the stopping distance of the car.



(a) Use words from the box to complete the sentence.

distance energy force time

The stopping distance is found by adding the distance the car travels during the driver's reaction and the distance the car travels under the braking

(2)

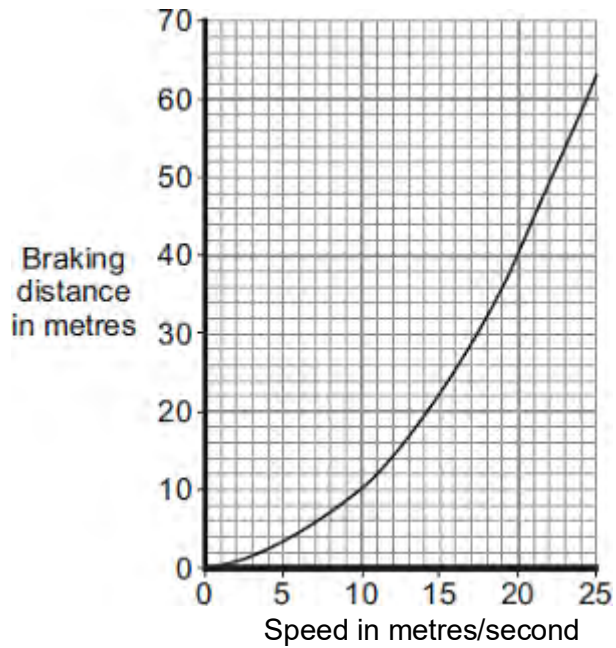
(b) Which **one** of the following would **not** increase the thinking distance?

Tick (✓) **one** box.

- The car driver being tired.
- The car tyres being badly worn.
- The car being driven faster.

(1)

(c) The graph shows how the braking distance of a car changes with the speed of the car.
The force applied to the car brakes does not change.



(i) What conclusion about braking distance can be made from the graph?

.....

.....

.....

.....

(2)

(ii) The graph is for a car driven on a dry road.

Draw a line on the graph to show what is likely to happen to the braking distance at different speeds if the same car was driven on an icy road.

(1)

(d) A local council has reduced the speed limit from 30 miles per hour to 20 miles per hour on a few roads. The reason for reducing the speed limit was to reduce the number of accidents.

(i) A local newspaper reported that a councillor said:

“It will be much safer because drivers can react much faster when driving at 20 miles per hour than when driving at 30 miles per hour.”

This statement is wrong. Why?

.....

.....

(1)

- (ii) The local council must decide whether to introduce the lower speed limit on a lot more roads.

What evidence should the local council collect to help make this decision?

.....

.....

.....

.....

(2)

(Total 9 marks)